


# Change

Each day, Kim buys two items and pays with the coin shown. Write how much change she gets each time.


1.



46p + 35p = 81p

100p - 81p = 19p change

2.



\_\_\_\_\_

\_\_\_\_\_


3.



\_\_\_\_\_

\_\_\_\_\_

4.



\_\_\_\_\_

\_\_\_\_\_

5. You have £5. Choose three items on this page to buy. Use the back of this sheet to work out how much change you get.



I can find the cost of items and work out the change

