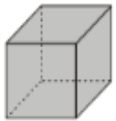
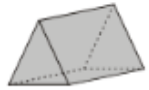


Date: **L.O. To identify nets of 3D shapes.**

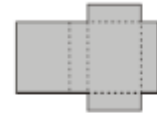


Name of shape	What shapes are the faces?	Which net?
Triangular prism	2 triangles, 3 rectangles	C

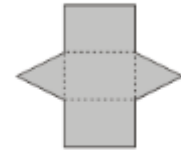
A



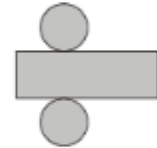
B



C



D



E



F



G

