

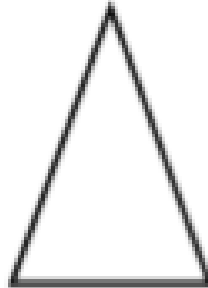
Name _____

1. Draw all of the lines of symmetry on the following.

a)



b)



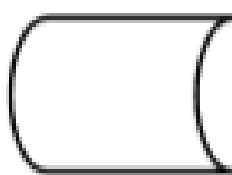
c)



d)



e)



f)



g)



h)

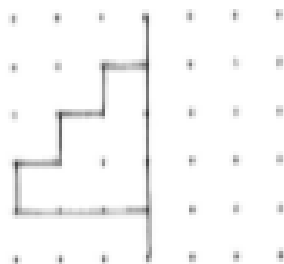


i)

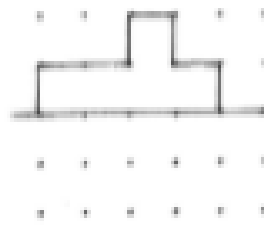


2. Complete the patterns by drawing the reflection in the mirror line.

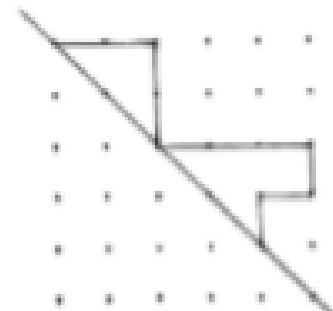
a)



b)



c)



3. Shade the squares needed to make the pattern symmetrical.

