

Name: \_\_\_\_\_

Primary 5-a-day

Silver



11th May

$$9 \times \square = 108$$

$$5,000 \div 10$$

Isla thinks of a number  
She multiplies it by 3.  
Her answer is 162

What was the number Isla started with?

James has 200 sweets  
 $\frac{3}{4}$  of the sweets are red.  
How many sweets are red?



Draw a line parallel to the line CD

C \_\_\_\_\_ D

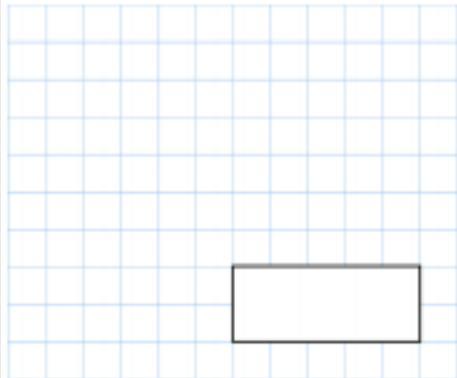
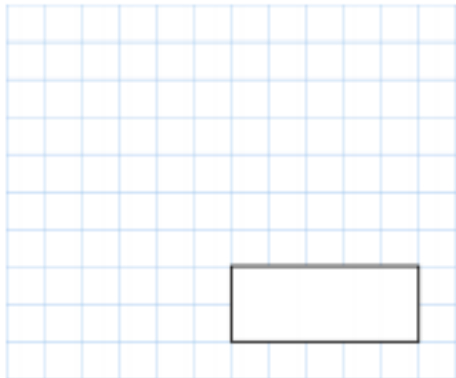





Name: \_\_\_\_\_

Primary 5-a-day

Silver



| 13th May   |   |
|--|---|
| $535 - 150$<br><br><input type="text"/>   | $9 \times 22$<br><br><input type="text"/> |
| <p>Hammer<br/><br/>£7.50 each</p> <p>Screwdriver<br/><br/>£5.79 each</p> <p>Screws<br/><br/>£1.30 for a bag</p> <p>Beth has £5</p> <p>She wants to buy a screwdriver and 5 bags of screws</p> <p>How much <b>more</b> money does she need?</p> |   |
| Round 1,509 to the nearest 10  | Round 1,509 to the nearest 100  |



