



Shading halves

Colour in half of each set of objects and write a number in each box to make the number sentence match the picture.




$$\boxed{\frac{1}{2}} \text{ of } 8 = \boxed{}$$




$$\boxed{} \text{ of } 6 = \boxed{}$$




$$\boxed{} \text{ of } 12 = \boxed{}$$



$$\boxed{} \text{ of } 14 = \boxed{}$$



$$\boxed{} \text{ of } 10 = \boxed{}$$



$$\boxed{} \text{ of } 16 = \boxed{}$$



I can find half of a number of objects

