



24-Hour and 12-Hour Time



1. Convert the following 12-hour times to 24-hour time.

12:00 p.m. = _____

10:30 p.m. = _____

3:20 a.m. = _____

12:05 a.m. = _____

7:50 p.m. = _____

5:25 p.m. = _____

2. Convert the following 24-hour times to 12-hour time.

16:43 = _____

02:30 = _____

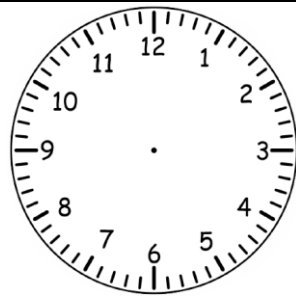
05:20 = _____

00:00 = _____

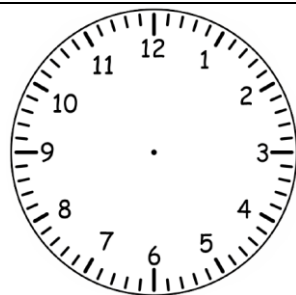
20:40 = _____

21:00 = _____

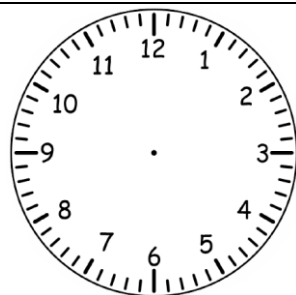
3. Show the given 24-hour time on the analogue clock.



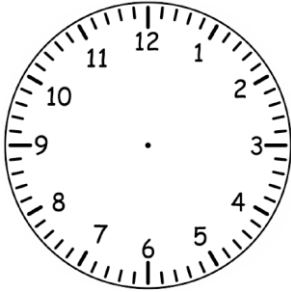
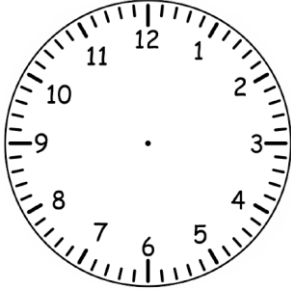
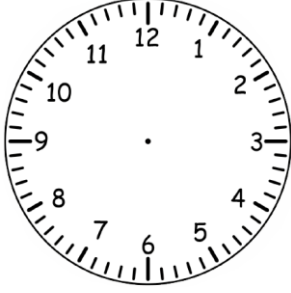
05:20



14:30



23:40

	<p>03:50</p>
	<p>19:15</p>
	<p>00:25</p>

4. If I got home at 17:30 and went to bed at 21:30, how long was I at home before I went to bed?
5. A car race began at 08:45 and finished at 14:35. How long did the race last?
6. The sun sets at 19:30 and rises again at 06:30.
- How many hours of darkness are there?
 - How many hours of daylight are there?